

Music Math - Level 1

(Add the beats)



Notes

1.  +  = _____

2.  +  = _____



3.  +  = _____

4.  +  = _____



5.  +  = _____

6.  +  = _____



7.  +  = _____



8.  +  = _____

9.  +  = _____

10.  +  = _____


Rests



11.  +  = _____



12.  +  = _____


13.  +  = _____



14.  +  = _____

15.  +  = _____

16.  +  = _____

17.  +  = _____

18.  +  = _____

19.  +  = _____

20.  +  = _____